

NAME: \_\_\_\_\_








TEACHER: \_\_\_\_\_

CLASS & SECTION: \_\_\_\_\_

DATE: \_\_\_\_\_

# More or Less?

Color or circle the group that has MORE children .  
Enjoy this fun counting activity.




NAME: \_\_\_\_\_

TEACHER: \_\_\_\_\_



CLASS & SECTION: \_\_\_\_\_

DATE: \_\_\_\_\_



# MORE OR LESS? HUNGRY ALLIGATOR

The hungry alligator is ready for some snacks! Draw some snacks in the boxes to help the alligator see which one has more and less. Remember, the alligator always eats the greatest number of snacks!



NAME: \_\_\_\_\_

TEACHER: \_\_\_\_\_

CLASS & SECTION: \_\_\_\_\_

DATE: \_\_\_\_\_

# TEN LESS, TEN MORE

10 LESS		10 MORE		10 LESS		10 MORE
21	31	41	⋮		70	
	20		⋮		45	
	52		⋮		98	
	11		⋮		25	
	36		⋮		48	
	84		⋮		13	
	67		⋮		89	

NAME: \_\_\_\_\_

TEACHER: \_\_\_\_\_

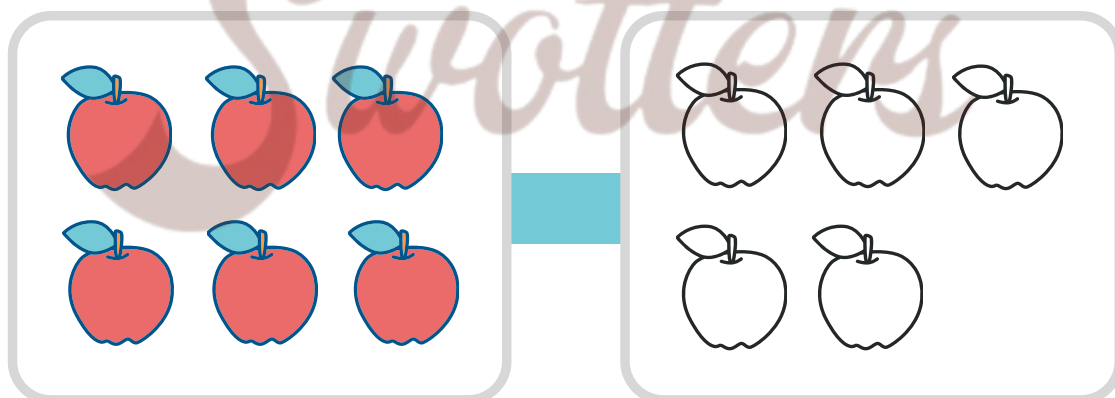
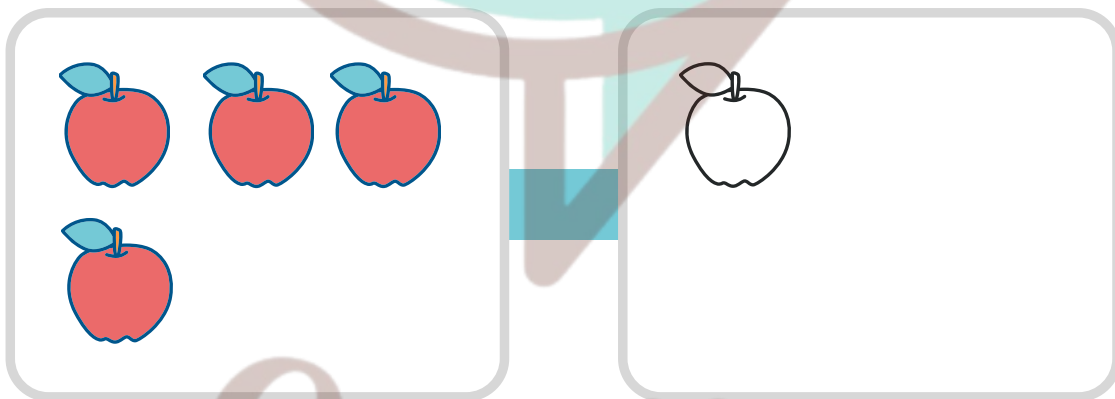
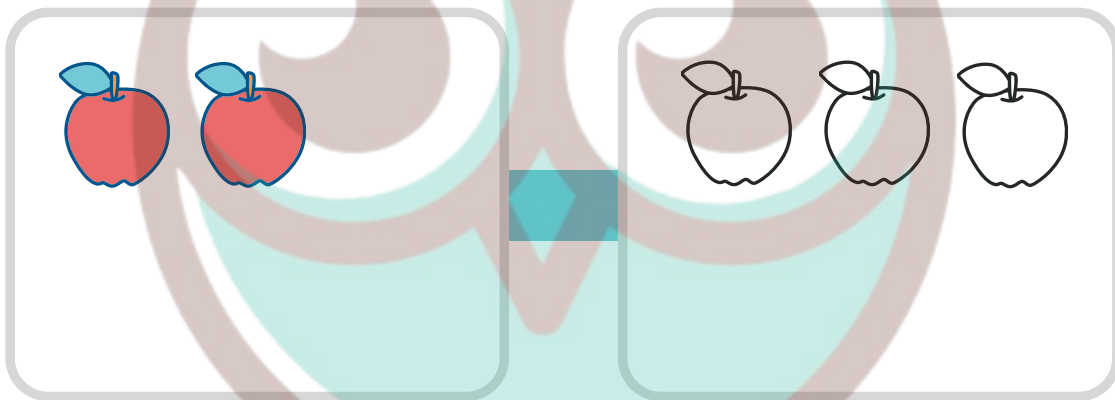
CLASS & SECTION: \_\_\_\_\_

DATE: \_\_\_\_\_

# Is it More or Less?

**Learn the concept of more and less.**

Instructions: Color the fruits in the right column. If there are more fruits in the right column than in the left, color them red. If there are less fruits in the right column than in the left, color them blue.



NAME: \_\_\_\_\_

TEACHER: \_\_\_\_\_

CLASS & SECTION: \_\_\_\_\_

DATE: \_\_\_\_\_

# GREATER OR LESS THAN

Compare the numbers and write  $<$ ,  $>$ , or  $=$

10  8

1  10

6  7

3  3

5  5

0  8

3  9

7  9

4  2

6  4

NAME: \_\_\_\_\_

TEACHER: \_\_\_\_\_

CLASS & SECTION: \_\_\_\_\_

DATE: \_\_\_\_\_

# Counting Cakes and Candies



Cakes

Candies

NAME: \_\_\_\_\_

TEACHER: \_\_\_\_\_

CLASS & SECTION: \_\_\_\_\_

DATE: \_\_\_\_\_

# Number Values

Color the number that has the bigger value

5	8
---	---

4	5
---	---

6	0
---	---

3	2
---	---

9	5
---	---

4	7
---	---

8	2
---	---

6	1
---	---

NAME: \_\_\_\_\_

TEACHER: \_\_\_\_\_






CLASS & SECTION: \_\_\_\_\_

DATE: \_\_\_\_\_

# Thanksgiving Feast Graphing

Create a bar graph to show the quantity of each of the items below. When finished color the picture on the back and complete the sentence.



Items	1	2	3	4	5	6	7	8	9	10
										
										
										
										
										



NAME: \_\_\_\_\_

TEACHER: \_\_\_\_\_





CLASS & SECTION: \_\_\_\_\_

DATE: \_\_\_\_\_

# Leaf Graphing

Create a bar graph to show the quantity of each of the fall leaves below. When finished color the fall picture on the back.



Number of Items	1	2	3	4	5
					
					
					
					

NAME: \_\_\_\_\_


TEACHER: \_\_\_\_\_

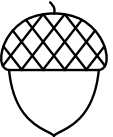



CLASS & SECTION: \_\_\_\_\_

DATE: \_\_\_\_\_

# Fall Graphing

Color the fall items below and then create a bar graph to show the quantity of each item.



Number of Items	1	2	3	4	5
					
					
					
					

NAME: \_\_\_\_\_


TEACHER: \_\_\_\_\_

CLASS & SECTION: \_\_\_\_\_

DATE: \_\_\_\_\_

# Dinosaur Graphing

Create a bar graph to show the quantity of each of the dinosaurs below. When finished color the picture on the back.



Number of Items	1	2	3	4	5
