

BIOLOGY



Important Questions

➤ Multiple Choice Questions:

Question 1. Ribosomes were discovered by

- (a) Golgi
- (b) Porter
- (c) Robertis
- (d) Palade

Question 2. In which component of a mitochondrion ATP is synthesised?

- (a) Matrix
- (b) outer membrane
- (c) crista
- (d) F₀-F₁ complex (Oxysome)

Question 3. Tonoplast, a differentially permeable membrane, surround the

- (a) nucleus
- (b) Cytoplasm
- (c) Lysosomes
- (d) Vacuole

Question 4. Addition of the new cell wall material in the existing one is

- (a) Deposition
- (b) Aggregation
- (c) Intussusception
- (d) apposition

Question 5. The interphase nucleus is enclosed in

- (a) a porous double membrane
- (b) a non-porous single membrane
- (c) a porous double membrane
- (d) many membranes

Question 6. The chloroplast thylakoids are in the form of

- (a) interconnected sacs
- (b) independent discs
- (c) interconnected tabules
- (d) stalked discs.

Question 7. Aerobic respiration is performed by

- (a) glyoxisome
- (b) lysosomes

- (c) mitochondria
- (d) stalked discs.

Question 8. Plant cell differ from animal cell in having

- (a) mitochondria
- (b) cell wall
- (c) golgi bodies
- (d) ribosomes

Question 9. The cell wall of certain fungi is made of

- (a) lignin
- (b) pectin
- (c) suberin
- (d) chitin

Question 10. Desmosomes are connected with

- (a) cytolysis
- (b) cell division
- (c) cell excretion
- (d) cell adherence.

Question 11. Fluid mosaic model of cell membrane state that it has lipid bilayer with

- (a) proteins on the outer surface only.
- (b) Some proteins embedded and some on the surface.
- (c) Proteins on both the surfaces.
- (d) Proteins embedded and some on the surface.

Question 12. Fluid mosaic model of cell membrane was proposed by

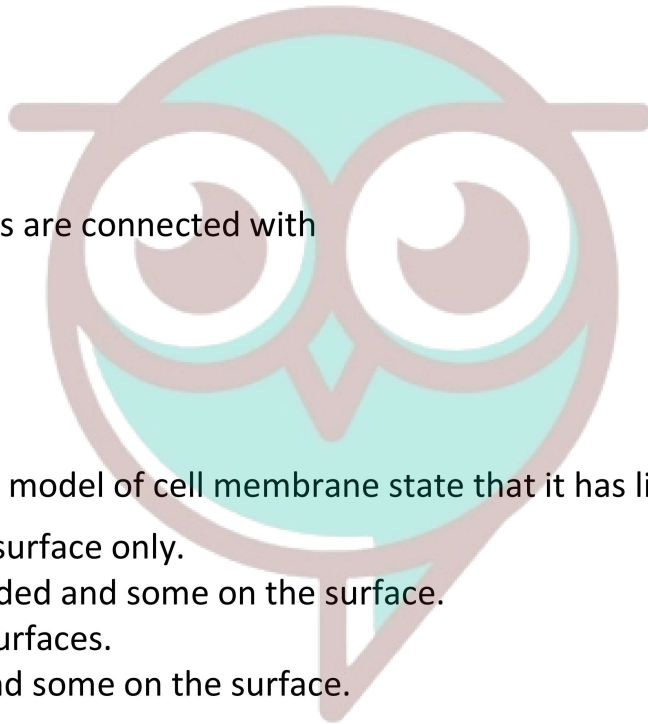
- (a) Singer and Nicholson
- (b) waston and crick
- (c) Robertson
- (d) danielli and davson

Question 13. Ribosomes are centres

- (a) Photosynthesis
- (b) liquid synthesis
- (c) Respiration
- (d) protein synthesis

Question 14. A membrahe covering

- (a) Mitochondrion
- (b) nucleolus
- (c) Plastid



Swotters

(d) Lysosome

Question 15. Solar energy is converted into ATP/chemical energy by

- (a) Chloroplast
- (b) Ribosome
- (c) Mitochondria
- (d) Peroxisome

➤ **Fill In the Blanks:**

1. All organisms are composed of Some are composed of a single cell and called organisms while others, like us, are composed of many cells and called organisms.
2. The study of structure, composition, functions and life processes of the cell is called
3. was the first person to describe the cell in 1865 when he used a microscope built by him to examine a thin slice of cork
4. In 1831, made an important discovery when he reported the presence of a small sphere in the cells of the orchid root
5. and combined their views and formulated the cell theory
6. The presence of several types of organ systems in the body of a multicellular organism is a unique example of

➤ **True or False:**

1. Sometimes a few chromosomes have secondary constrictions at a constant location, which are their non-staining region and give the appearance of a small fragment called the satellite.
2. Every chromosome essentially has a primary constriction or the centromere on the sides of which disc shaped structures called kinetochores, for the attachment of the spindle fibres, is also present.
3. The biochemical analysis of the isolated chromatin has revealed that it contains DNA, some basic protein called histones, some nonhistone proteins and also RNA.
4. The electron microscope has revealed that the nuclear envelope, which consists of two parallel membranes spaced by 10 to 50nm called the perinuclear space.
5. The eukaryotic cells usually possess a large sized, almost centrally located and densely stained organelle containing the genetic material called nucleus.
6. The central part of the centriole is also proteinaceous called the hub, which is connected with a tubules of the peripheral tripets by radial spokes made up of protein.

➤ **Very Short Question:**

1. Who gave the term chromosome?

2. Define a cell coat.
3. Where is dynein present?
4. Define sarcoplasmic reticulum.
5. What are pili?
6. What are fimbriae?
7. Name the organelle of the cell called 'Suicidal-bag'?
8. Define cytoplasm.
9. Define plasmodesmata.
10. What are the three parts of a flagellum?

➤ Short Questions:

1. Give the fundamental similarities in all cells:
2. What are Cytoskeletal Structures?
3. What are the main functions of the cell wall?
4. List the functions of Golgi bodies.
5. Name different types of the endoplasmic reticulum.
6. Why does the efficiency of a cell decrease with an increase in size in a unicellular organism?
7. The cell is "an open dynamic system" discuss.
8. On what basis can we consider the cell as an autonomous unit?

➤ Long Questions:

1. What is the role of the plasma membrane in the compartmentalization of the cell?
2. The cells of unicellular organisms are usually spherical whereas those of multicellular tend to be many-sided. Why?
3. Discuss how the method of science is reflected in the formulation of cell theory?
4. If, as the second law of thermodynamics states, "the free energy in any system tends to decrease", how is it that the earth maintains so many living organisms, each in a highly organized, high free energy state?
5. Explain the structure and function of mitochondria.

Assertion Reason Question-

1. In these questions, a statement of assertion followed by a statement of reason is given. Choose the correct answer out of the following choices.

- (a) If both Assertion and Reason are true and Reason is the correct explanation of Assertion.
 (b) If both Assertion and Reason are true but Reason is not the correct explanation of Assertion.
 (c) If Assertion is true but Reason is false.
 (d) If both Assertion and Reason are false.

Assertion: Organisms are made up of cells.

Reason: Cells are structural unit of living organisms. A cell keeps its chemical composition steady within its boundary.

2. In these questions, a statement of assertion followed by a statement of reason is given. Choose the correct answer out of the following choices.

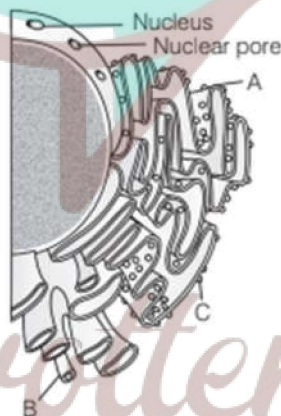
- (a) If both Assertion and Reason are true and Reason is the correct explanation of Assertion.
 (b) If both Assertion and Reason are true but Reason is not the correct explanation of Assertion.
 (c) If Assertion is true but Reason is false.
 (d) If both Assertion and Reason are false.

Assertion: Specialization of cells is useful for organism.

Reason: It increases the operational efficiency of an organism.

Case Study Based Question-

1. Observe the diagram given below and answer the questions that follow



- (i) Identify the labels A, B and C shown in the above diagram.

A	B	C
(a) Ribosomes	SER	RER
(b) RER	SER	Ribosomes
(c) SER	Ribosomes	RER
(d) RER	Ribosomes	SER

- (ii) The label 'C' in the given diagram is the site of

- (a) respiration
 (b) photosynthesis
 (c) protein synthesis

(d) fat synthesis

(iii) Difference between rough and smooth endoplasmic reticulum is that

- (a) rough ER has ribosomes
- (b) smooth ER has ribosomes
- (c) smooth ER takes part in protein synthesis
- (d) Both has F1 particles

(iv) Ribosomes are

- I. Non-membrane bound.
- II. Absent in plastids and mitochondria.
- III. Present in the cytoplasm and RER.

Choose the correct option.

- (a) Only II
- (b) I and II
- (c) I, II and III
- (d) I and III

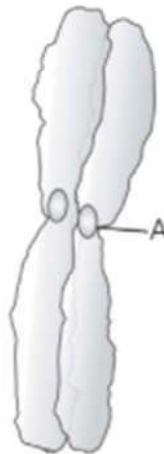
(v) Which of the following statements are true about endoplasmic reticulum?

- I. Smooth Endoplasmic Reticulum (SER) makes lipids.
- II. It is also called the control centre of the cell.
- III. It processes carbohydrates.
- IV. It modifies chemicals that are toxic to the cell.

Choose the correct option

- (a) I, II and III
- (b) I, III and IV
- (c) I and IV
- (d) All of these

2. Observe the diagram shown below and answer the following questions.



- (i) Identify the label A in the above diagram.
- Chromatin fibre
 - nuclear pore
 - Kinetochores
 - None of these
- (ii) Choose the correct pair.
- Histones — Basic proteins
 - Centromere — Secondary constriction
 - Kinetochores — Kidney-shaped structure
 - None of the above
- (iii) For the study of structure of nucleus, the best cell is
- cell in the interphase
 - cell in the late prophase
 - cell in the divisional phase
 - cell in the meiotic phase
- (iv) Which of the following table refers correctly to the chromosome?

	Numbers of Centromere	Numbers of Kinetochores	Numbers of Arm
(a)	2	1	4
(b)	1	2	4
(c)	2	2	4
(d)	1	2	2

- (v) Which of the following stains is not used for staining chromosomes?
- Basic fuchsin
 - Safranin
 - Methylene blue
 - Carmine

✓ **Answer Key-**

➤ Multiple Choice Answers:

- (d) Palade.
- (d) F₀-F₁ complex (Oxysome)
- (d) Vacuole.
- (c) Intussusception.
- (c) A porous double membrane.

6. (a) Interconnected sacs.
7. (c) Mitochondria.
8. (b) Cell wall
9. (d) Chitin
10. (d) Cell adherence.
11. (b) Some proteins embedded and some on the surface.
12. (c) Robertson.
13. (d) Protein synthesis.
14. (b) Nucleolus.
15. (a) Chloroplast.

➤ **Fill In the Blanks:**

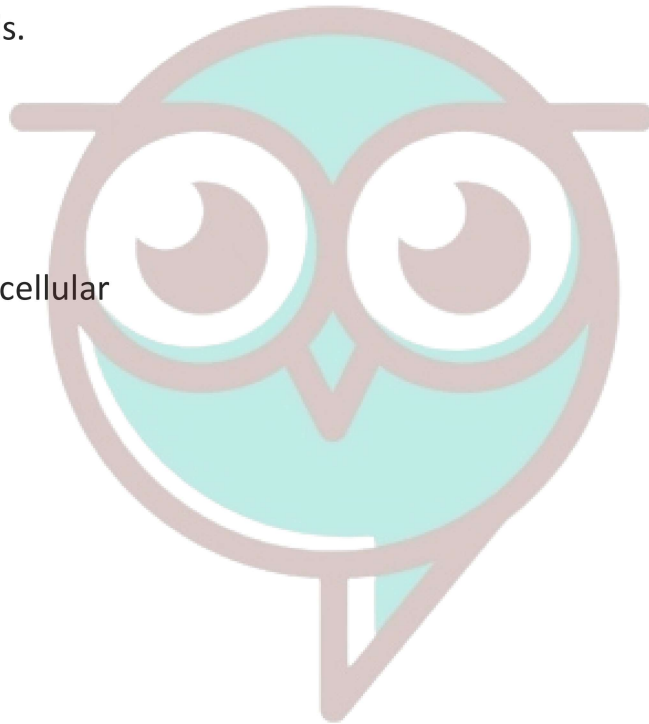
1. cells, unicellular, multicellular
2. cell biology
3. Robert Hooke
4. Robert Brown
5. Schleiden, Schwann
6. division of labour

➤ **True or False:**

1. True
2. True
3. True
4. True
5. True
6. True

➤ **Very Short Answers:**

1. Answer: Waldayer.
2. Answer: A clear layer of oligosaccharide outside the cell membrane in some animal cells.
3. Answer: In microtubules of flagella.
4. Answer: It is defined as the ER found in striated muscles.
5. Answer: Pili are elongated, tubular structure in Gram-ve bacteria.



Swotters

6. Answer: Fimbriae are small, bristle-like fibers sprouting out of the cell in bacteria.
7. Answer: Lysosomes are called suicidal bags of the cell.
8. Answer: The cytoplasm is a jelly fluid of protoplasm composed of inorganic and organic matters containing many organelles like ribosomes, ER, vacuole, etc.
9. Answer: Plasmodesmata are connections between two cell walls that are interrupted by small pores having fine threads of cytoplasm.
10. Answer:
 1. filament
 2. hook and
 3. basal body.

➤ Short Answer:

1. Answer: Fundamental similarities in all cells are:
 1. Hereditary characters are transmitted through nucleic acids.
 2. The basic structure of membranes of all cell organelles is the same.
 3. Method of aerobic respiration.
 4. Mechanism of synthesis of nucleic acids and proteins within the cells.
2. Answer: Cytoskeletal Structures: The ability of eukaryotic cells to adopt different types of shapes and to perform directed movement depends on the cytoskeleton.

There are three principal types of protein filaments

1. Microfilaments,
2. Microtubules, and
3. Intermediate filaments.

These constitute the cytoskeleton. The microfilaments are 8 nm in diameter, either scattered or organized into the network or parallel arrays within the matrix. They play a major role in cell motion (changes in shape). Such cellular movements associated with the microfibrils are movements of pigment granules, amoeboid movements, and protoplasmic streaming. These microfilaments consist of actin-like proteins.

3. Answer: The main functions of the cell wall are:
 1. It gives a definite shape to the cell and protects the internal organelles.
 2. It provides a framework and lends support to the plasma membrane.
 3. It prevents the cell from desiccation.
 4. It counteracts physically the osmotic pressure produced by the cell contents.

5. It helps in the transport of materials and metabolites in and out of the cell.
4. Answer: The functions of Golgi bodies are:
- Storage, condensation, and packaging of the material.
 - Several enzymes are localized in Golgi bodies.
 - During spermatogenesis, Golgi apparatus form the euro some.
 - Mucilage and gums are secreted in plant cells due to the action of the Golgi apparatus.
5. Answer: There are two types of EM.
- i. Smooth ER (Agranular) and
 - ii. Rough ER.
6. Answer: With the increase in size, volume increases but surface area exposed to the environment does not increase correspondingly. This limits the exchange of information and materials through the surface. As a result efficiency of the cell as an autonomous unit decreases.
7. Answer: The cell is an open system because it allows the entry and exit of matter and energy. It takes up food, oxygen, water, and salts for its substance, growth, and division. The cell also takes up energy from- food and operates the metabolic processes. It gives out waste products, secretions, and energy.
8. Answer: The cell can be considered as an autonomous unit because:
1. Each cell-carries out all fundamental biological processes independently.
 2. Each cell oxidizes food material and utilizes that energy and some nutrient molecules to synthesize complex molecules.
 3. The cell uses these molecules to build new structures and to replace worn-out cells.
 4. The cell respire and exchanges gases with the environment.
 5. It reproduces to form new cells with similar hereditary characters,
 6. It also maintains an internal physiochemical environment.

➤ Long Answer:

1. Answer: Every cell is enclosed on all sides by the distinct covering called the plasma membrane.
1. It maintains the individuality of the cell by preventing the mixing of cell contents with extracellular materials.
 2. The cell is not a sealed compartment and the exchange of materials is allowed by the cell membrane in a selective and regulated manner.
 3. In animals, the cell membrane has on its surface certain chemical that can recognize cells of t

same kind. This helps the cells to aggregate and defend themselves against microbes.

4. The cell membrane also receives messages from outside and passes them to adjacent cells.

5. The cell membrane selectively allows the passage of certain molecules and ions from the seawater to enter the cells of organisms living in the sea.

2. Answer:

- It is true that the cells of unicellular organisms tend to be spherical. It is because of the following reasons.
- Surface tension: Surface tension shapes the spherical way as in the case in air-borne soap bubbles.
- The free-floating cells with thin membranes tend to be spherical as it is the most economical shape that can confine a given mass of protoplasm.

However, the shape and the size of the cell depend upon the place where they are present and the functions they have to perform. In multicellular animals, the cells tend to become faceted as they come in contact with each other in the same way as the spherical soap bubbles become flattened when they are jammed together in a small space.

This phenomenon can be best seen in the early stages of the development of an embryo. The cell mass still remains spherical for some time but when the cells multiply the shape changes because of adjusting themselves to the available space. This is also true in plants, they have in addition cellulose also.

But the most important aspect of cell shape is the functions each cell has to perform.

3. Answer: Methods of science and cell theory: Scientific method of solving a problem is a realistic approach and it helps us in finding out the truth.

The scientist after making observations of many samples proposes a hypothesis that is subject to be tested before it is taken as a theory.

i. In the case of cell theory Theodor Schwann after examining many types of tissues found that all these have cells and the cells have a nucleus and cytoplasm universally present and then after comparing its structure to that of plant cells proposed a hypothesis that bodies of animals and plants are composed of cells and products of cells.

ii. This hypothesis was later confirmed by Schleiden who examined a large variety of plant tissues and found all of them to be composed of cells. Thus the hypothesis of Schwann became a theory of Schleiden and Schwann.

Further, as the scientific method says a theory can be changed, modified, or discarded on the basis of new discoveries. The cells theory of Schleiden and Schwann was modified by Rudolf Virchow who was the first to explain that, "cells divide and all-new cells must come from pre-existing cells."

Thus we can say that method of science is fully reflected in the formulation. of the cell theory.

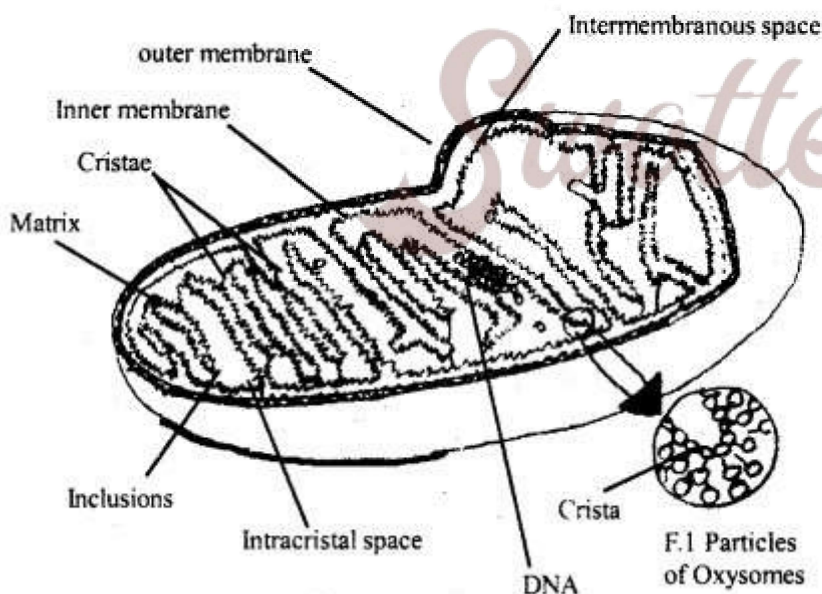
4. Answer:

1. To maintain the organization of living organisms every system of energy, try to reduce entropy. Entropy is the degree of randomness. If the system is left on its own it increases in entropy.
2. Earth receives a continuous supply of energy from the sun in the form of photons of light.
3. 0.2 to 1% of the solar energy received by the earth enters the biosphere in the form of chemical energy through the process of photosynthesis. Heterotrophs depend upon autotrophs for food.
4. Flows of energy take place from photosynthesizers to heterotrophs ,, forming food chains and food webs.
5. Approximately 10% of the energy is conserved at each trophic level. This is how earth maintains so many living organisms in a highly organized state.

5. Answer: Structure of Mitochondria: They are spherical or elongated or rod-like cell organelle. Mitochondria were first discovered by Hofmeister in the cells of a pteridophyte, Equisetum. They were named 'Mitochondrion' by Benda.

Mitochondria is a double membranous organelle, the outer membrane is smooth while the inner one is folded into a number of cristae. The space between the two membranes is called the outer chamber while the space surrounded by the inner membrane is an inner chamber that is filled with homogenous fluid. The inner membrane has a large number of F₁ particles or oxysomes.

These are the sites for oxidative phosphorylation. Each Oxysome has a head, stalk, base; The number of elementary particles in a mitochondrion maybe 10⁴-10⁵. The head of F₁ particle contain ATP synthetase enzyme hence they are said to be ATP particles.



Mitochondria from animal cell

Functions of mitochondria:

1. A powerhouse of the cell and store energy as ATP.
2. Several respiratory enzymes are found in mitochondria.
3. DNA is also contained in mitochondria.
4. They regulate the concentration of calcium ions in the cells.

Assertion Reason Answer-

1. (a) If both Assertion and Reason are true and Reason is the correct explanation of Assertion.

Explanation: Cells are the basic structural and functional unit of organism.

2. (a) If both Assertion and Reason are true and Reason is the correct explanation of Assertion.

Explanation: Specialization of the cell increases the efficiency of the cell for a particular function.

Case Study Answer-

1. **Answer:**

- (i) (b)
- (ii) (c)
- (iii) (a)
- (iv) (d)
- (v) (b)

2. **Answer:**

- (i) (c)
- (ii) (a)
- (iii) (a)
- (iv) (b)
- (v) (b)

